

Year 5 Homework

Due: Thursday 25th April 2024

Reading text: Children of Benin

Please read and annotate the text.

Spelling-

Practice in book (definition and use the word in a sentence).

accompany,
communicate,
conscience, desperate,
disastrous, interfere,
nuisance, queue,
restaurant, rhythm

<https://www.edshed.com/en->

History- create a fact file on the history of Benin.

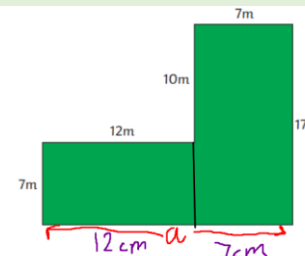


Maths [School login - MyMaths](#) [Times Tables Rockstars](#) [Times Tables Rock](#)

The perimeter is the total measurement of all of the sides of a 2D shape.

To work out the distance around the edge of a shape you must add together the length of each of the sides.

In these shapes there is a missing side. Calculate the length of the missing side and then work out the perimeter. Show the calculation you used for the missing side and also the perimeter (in your book)



a: $12m + 7m = 19m$

perimeter:

$19m + 7m + 12m + 10m + 7m + 17m = 72m$

SPaG

1. Which verb is created when these suffixes are added to the noun? Write the correct verb for each example.

identity + -fy

advert + -ise

assassin + -ate

2. Circle the modal verbs in the sentence below.

'We should leave,' he whispered. 'They could come back at any time.'

3. Underline the relative clause in the sentence below.

We are going to go back to Devon this year, where I first learnt to surf.

4. Read this sentence. What type of word is underlined? Tick one.

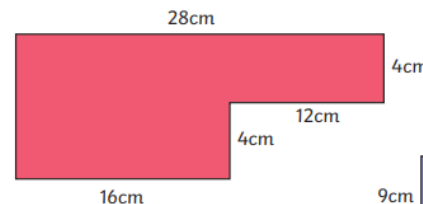
That's the lady who teaches me to play the drums.

possessive pronoun

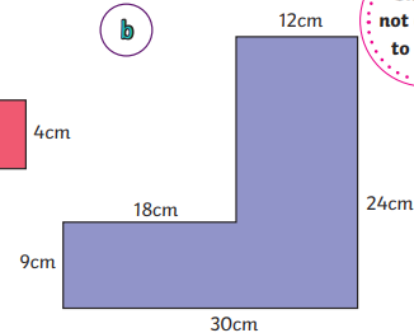
relative pronoun

personal pronoun

a

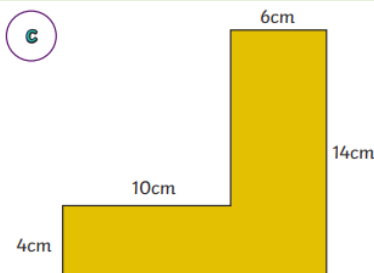


b



Shapes not drawn to scale

c



d

