

Year 5 Homework due Thursday 28th March 2024

Please make sure that you are reading every day and your reading record is signed.


Spelling


<https://www.edshed.com/en-gb/login>


1. although,
2. bough,
3. dough,
4. doughnut,
5. enough,
6. plough,
7. rough,
8. though,
9. tough,
10. toughen


Maths [Times Tables Rockstars](#) [Times Tables Rock Stars: Play \(trockstars.com\)](#)


2. Simplify the fractions on the hot cross buns.

a)  $\frac{9}{12}$


b)  $\frac{45}{54}$


c)  $\frac{8}{20}$


d)  $\frac{33}{88}$


e)  $\frac{24}{42}$


3. Put the fractions on the Easter eggs in order from smallest to largest.

a)  $\frac{1}{3}$



b)  $\frac{5}{7}$



c)  $\frac{5}{9}$



d)  $\frac{3}{7}$

e)  $\frac{6}{9}$



4. Insert the < or > signs between each pair of chicks to make the statements correct.

a)  $\frac{1}{3}$  $\frac{3}{4}$

b)  $\frac{3}{5}$  $\frac{5}{9}$

c)  $\frac{7}{11}$  $\frac{9}{15}$

The daffodils are hiding some of the digits in this short multiplication. Work out the missing digits.

3		9	4
×		6	
1		5	