

Year 5 Homework due Thursday 14th March 2024

English Reading – Pre read DGR text Please make sure that you are reading every day and your reading record is signed.

Spelling

<https://www.edshed.com/en-gb/login>

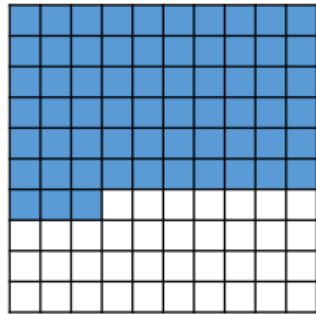
struggle, terrible, possible, example

Maths Log on to My Maths <https://login.mymaths.co.uk/login>
Times Tables Rockstars [Times Tables Rock Stars: Play \(ttrockstars.com\)](https://www.ttrockstars.com) make sure you learn the blue times table facts below.

2 × 2	2 × 3	2 × 4	2 × 5	2 × 6	2 × 7	2 × 8	2 × 9
3 × 2	3 × 3	3 × 4	3 × 5	3 × 6	3 × 7	3 × 8	3 × 9
4 × 2	4 × 3	4 × 4	4 × 5	4 × 6	4 × 7	4 × 8	4 × 9
5 × 2	5 × 3	5 × 4	5 × 5	5 × 6	5 × 7	5 × 8	5 × 9
6 × 2	6 × 3	6 × 4	6 × 5	6 × 6	6 × 7	6 × 8	6 × 9
7 × 2	7 × 3	7 × 4	7 × 5	7 × 6	7 × 7	7 × 8	7 × 9
8 × 2	8 × 3	8 × 4	8 × 5	8 × 6	8 × 7	8 × 8	8 × 9
9 × 2	9 × 3	9 × 4	9 × 5	9 × 6	9 × 7	9 × 8	9 × 9

1a. Which number is represented below?

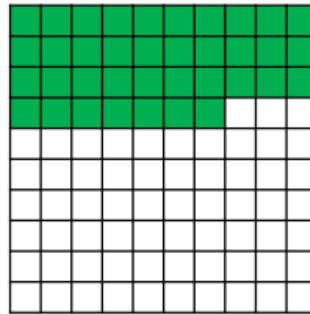
A. 0.6 B. 0.63 C. 0.37



VF

1b. Which number is represented below?

A. 0.73 B. 3.7 C. 0.37



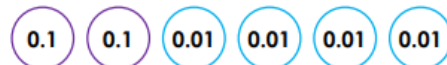
VF

2a. True or false? The following place value counters are equivalent to 0.52.



VF

2b. True or false? The following place value counters are equivalent to 0.24.




VF

3a. What decimal number is represented by the place value counters below?



VF

3b. What decimal number is represented by the place value counters below?



VF