


Wednesday 8th July

I can use known multiplication facts to multiply by multiples of 10.




How many oranges are there in the 4 boxes altogether?

How can you work this?



Multiply 2 ones by 4

$$2 \times 4 = 8$$



Multiply 2 tens by 4

$$20 \times 4 = 80$$

There are 80 oranges in the 4 boxes altogether.

You know $2 \times 4 = 8$ Then $20 \times 4 = 80$

Now practise. You can use diennes to help you.

$3 \times 4 = \square$

$3 \times 40 = \square$




3 × 4 tens



$4 \times 8 = \square$

$4 \times 80 = \square$

4 × 8 tens



$3 \times 20 = \square$

$3 \times 40 = \square$

$3 \times 80 = \square$



What is 3 × 30?

Have a go at the worksheet.

Don't forget to use your known multiplication facts to help you to solve.

Then have a go at the challenges.