



Friday 10<sup>th</sup> July

I can recall multiplication and division facts for tables of 4 and 8.




How do we put these apples into 4 and 8 equal groups?

You can use counters and pictures to help you.



24 into 4 groups

$$24 \div 4 = 6$$



24 into 8 groups

$$24 \div 8 = 3$$

What do you notice about the answers?

How can we multiply these?

$$24 \div 4 = 6$$

$$4 \times 6 =$$

$$24 \div 8 = 3$$

$$8 \times 3 =$$

Work the missing number to the multiplication then find the division.

$28 \div 4 = \square$

$\square \times 4 = 28$

$48 \div 8 = \square$

$\square \times 8 = 48$

$24 \div 8 = \square$

$\square \times 8 = 24$

$24 \div 4 = \square$

$\square \times 4 = 24$

Now have a go at the missing numbers on the worksheet.

Then have a go at the challenge.