

Tally Charts

1. This data shows the type of car different people drive.

Ford	Fiat	Honda	Vauxhall	BMW
BMW	Ford	Fiat	Ford	Honda
Honda	Vauxhall	Ford	BMW	Honda
Ford	Fiat	Vauxhall	Ford	Vauxhall





(a) Fill in the tally chart to show the above data.

Type of car	Tally	Frequency


- (b) What type of car was most popular?
- (c) How many people were asked in total

Now use this information and construct a pictogram. Think about the name of your pictogram, the title and the key of your pictogram. Look at one of the pictograms from Monday to help you.

The pictogram shows the favourite pizza types of children in class 3E.

Pizza type	Number of children
Pepperoni	
Hawaiian	
Vegetarian	
Cheese & tomato	

Key

 = 2 children

Key:

