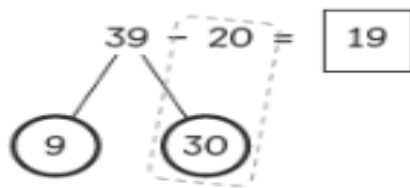


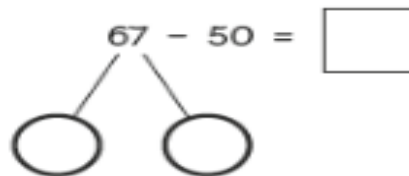
20 from 39.



$$30 - 20 = 10$$

$$10 + 9 = 19$$

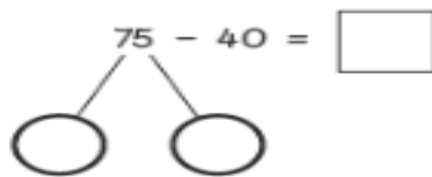
(a) 50 from 67.



$$\square - \square = \square$$

$$\square + \square = \square$$

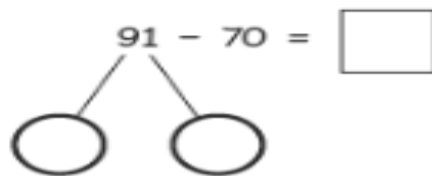
(b) 40 from 75.



$$\square - \square = \square$$

$$\square + \square = \square$$

(c) 70 from 91.



(a)

	tens	ones
	5	7
-	4	0
<hr/>		
<hr/>		

(b)

	tens	ones
	2	5
-	1	0
<hr/>		
<hr/>		

(c)

	tens	ones
	5	8
-	5	0
<hr/>		
<hr/>		

(d)

	tens	ones
	9	6
-	8	0
<hr/>		
<hr/>		

(e)

	tens	ones
	8	7
-	3	0
<hr/>		
<hr/>		

(f)

	tens	ones
	6	5
-	4	0
<hr/>		
<hr/>		