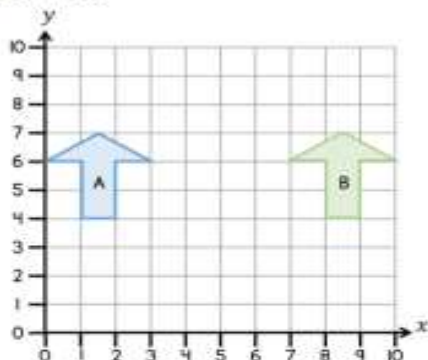


Day 5 - Answer the following 3 questions on reflection and translation

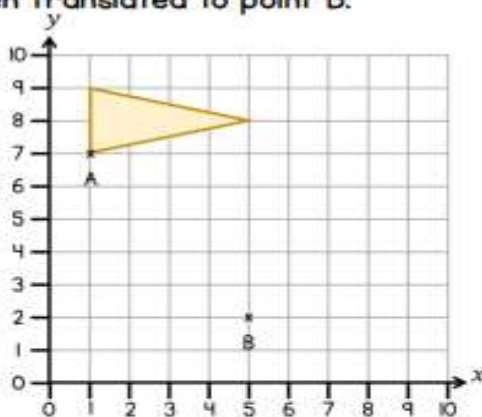
- 4 Arrow A has been reflected to Arrow B.  
Draw the mirror line.



Complete the sentence to describe the translation from A to B.

Arrow A has moved \_\_\_\_\_ right and \_\_\_\_\_ up.

- 5 Point A has been translated to point B.



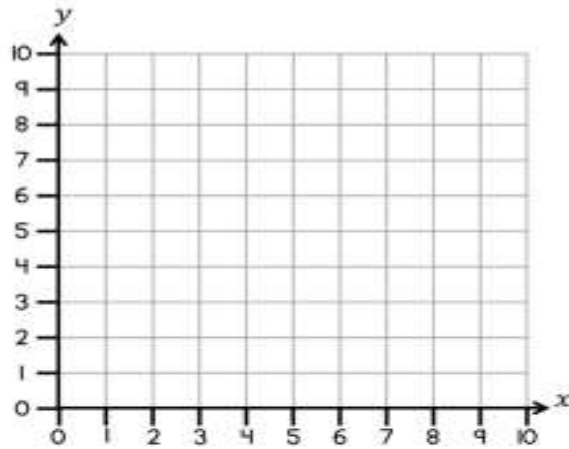
Describe the translation.

Point A has been translated \_\_\_\_\_ and \_\_\_\_\_

Complete the translation for the triangle.

---

- 6** Complete the coordinates.  
You may use the grid to help.



(4, 9) translated 3 left is (     ,     )

(6, 2) translated 1 down is (     ,     )

(4, 5) translated 2 right and 5 up is (     ,     )

(7,     ) translated 7 up is (     , 9)