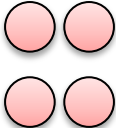
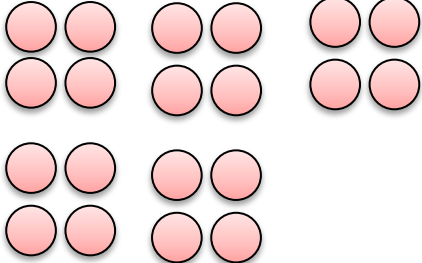
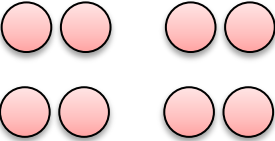
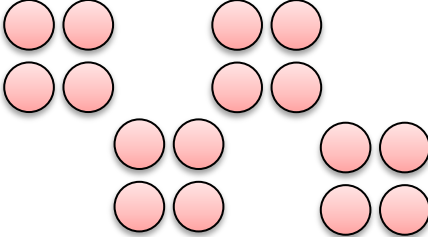
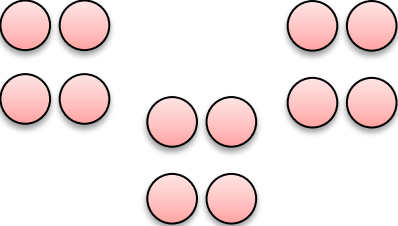
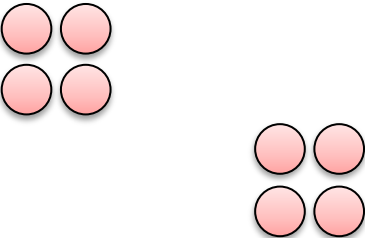


Counting in 4's

Counting in 4's, write down the value of each box.

	<u>4</u>		<u>20</u>
	<u>8</u>		<u>16</u>
	<u>12</u>		<u>8</u>

Count in 4's and fill in the missing number.

4	8	12	16	20	24	28	32	36	40
---	---	----	----	----	----	----	----	----	----

4	8	12	16	20	24	28	32	36	40
---	---	----	----	----	----	----	----	----	----

4	8	12	16	20	24	28	32	36	40
---	---	----	----	----	----	----	----	----	----

4	8	12	16	20	24	28	32	36	40
---	---	----	----	----	----	----	----	----	----