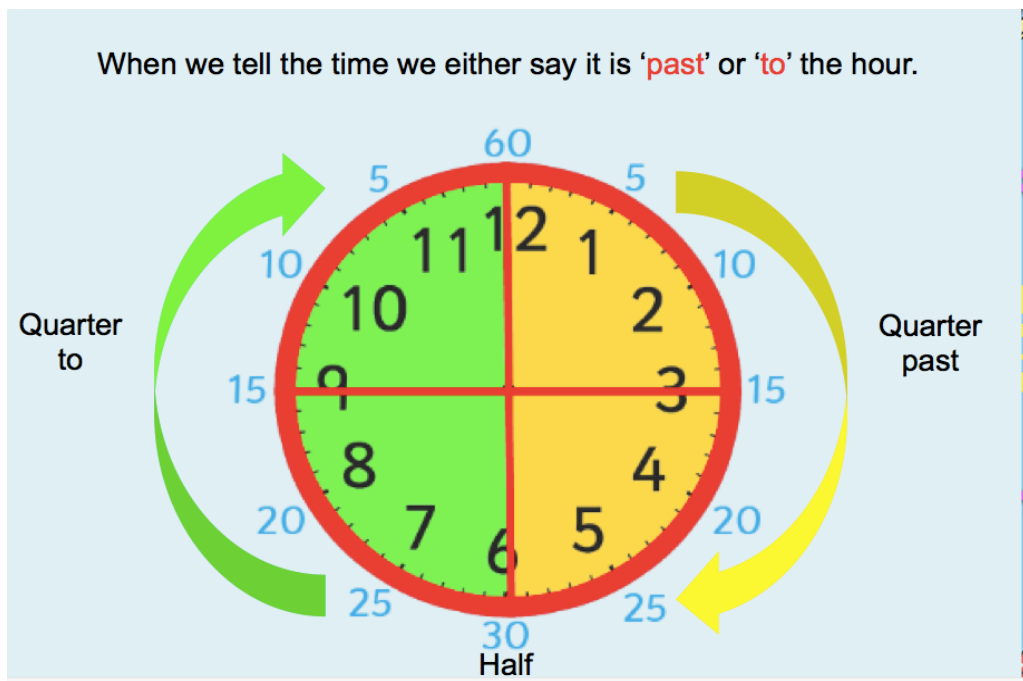


Wednesday 6th May – Maths

This week we are working on time.








Remember we count up in 5s when we go round the clock face.



Either print out the chart on the next page or draw it in your exercise book, and then fill in all the missing times.

Look at the answers on the next page and mark your work. Let your teacher know how you did.

Converting Time Worksheet - Answers

Time in Words	24 Hour Clock	12 Hour Clock	Analogue
seven o'clock in the evening	19:00	7:00p.m.	
eleven o'clock in the morning	11:00	11:00a.m.	
quarter past two in the afternoon	14:15	2:15 p.m.	
twenty past eight at night	20:20	8:20p.m	
midday	12:00	12:00 p.m.	
twenty to seven in the evening	18:40	6:40p.m.	
midnight	00:00	00:00 a.m.	
seven minutes to eight at night	19:53	7:53 p.m.	