

Year Group: 6

Date: Wednesday 20<sup>th</sup> May

Subject	Lesson focus/objective (I can....)	Activity and/or instructions
Reading	I can answer word meaning questions based on the text.	Please click the link on the <b>website</b> labelled <b>DGR Wednesday</b> and follow the instructions.
Mathematics (including times tables)	I can solve reasoning questions based on finding missing angles.	For the answers to yesterday's maths, please click the link on the <b>website</b> labelled ' <b>Tuesday maths answers</b> '. For today's maths please see the questions <b>below</b> . Look over yesterday's power point again if you need a reminder on how to solve these types of questions. Answers will be on the website for you to mark your work tomorrow.
Writing	Grammar I can use the past, present and future tense correctly.	Today you will be revising the past, present and future tenses. Complete the sentences <b>below</b> . Tomorrow you will be given the answers to mark your work.
Other	I can tap out a 'Ping Pong' beat.  I can participate in online body percussion sessions.	Click on the link on the website called <b>Music Wednesday</b> . Follow the instructions to try tapping or clapping the rhythm.  Click on <b>Beat Goes On</b> and choose a body percussion session from one of the links.

Reading:

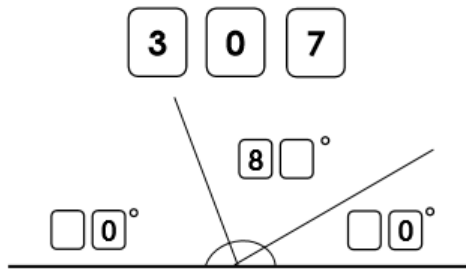
Please read daily and complete your reading record. You can access Accelerated Reader clicking here and putting in your user name and password:

<https://ukhosted2.renlearn.co.uk/1894742/>

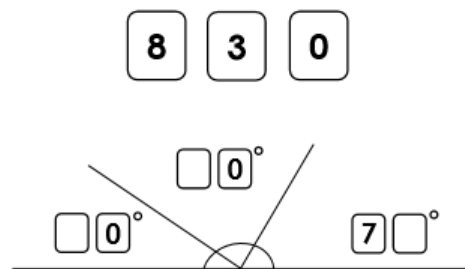
You may find that some of your books at home are also on AcceleratedReader, so re-read them and give the quiz a go.

## Wednesday – Maths

1a. Use the digit cards to fill in the missing angles.



1b. Use the digit cards to fill in the missing angles.



3a. The minute hand on the clock moves from the 12 to the 3. It makes a  $70^\circ$  angle. True or false?



Explain why.



3b. The minute hand on the clock moves from the 3 to the 9. It makes a  $200^\circ$  angle. True or false?



Explain why.



2a. Use the hints to work out the angles.

Two angles make up a right angle.

Angle B is double angle A.  
Both the angles are multiples of 10.

What are the 2 angles?

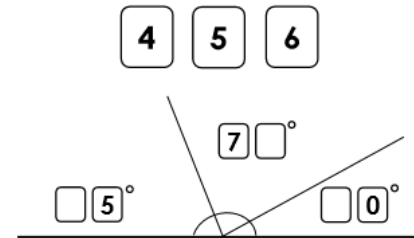
2b. Use the hints to work out the angles.

Three angles make up a right angle.

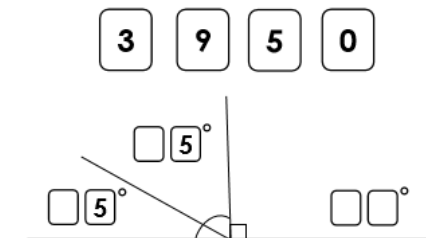
A and B are equal angles.  
C is half of 100.  
They are all multiples of 10.

What are the 3 angles?

4a. Use the digit cards to fill in the missing angles. Each angle is a multiple of 5.



4b. Use the digit cards to fill in the missing angles. Each angle is a multiple of 5.



# English Grammar

 **Past, present and future tenses**

*Don't let these pages get you all tense — soon they'll be a thing of the past.*

1. The verbs in bold are in the wrong tense. Write the correct version on the line.

- Oliver **competed** in the dance competition tomorrow. ....
- He's absolutely sure he **knew** where he's going. ....
- My grandad's parrot can **sang** "Happy Birthday". ....
- I nearly **has** my hand bitten off by a llama. ....
- You **laughed** when you see their fancy dress tonight. ....

2. I go to the pool and I swim ten lengths. Then, I jump in from the diving board.

a. Rewrite these sentences in the past tense.

.....  
.....

b. Rewrite these sentences in the future tense.

.....  
.....

3. Write the words in brackets in the correct tense to complete the paragraph.

Fatima and Ayesha often (go) ..... shopping. Last weekend, they (travel) ..... by train to Birmingham to go to the shopping centre. They (eat) ..... lunch at a coffee shop and (choose) ..... a birthday present for their dad. They (have) ..... a great time and (agree) ..... that they would definitely go again soon.