


Capacity

Quiz



Warm up!

Compare Capacity



Which carton holds the most?

Apple



Orange



Put these boxes in order from smallest to largest capacity.

smallest

largest



Compare Capacity



Complete these statements.

 is less than


 is more than

The background features a repeating pattern of water bottles. Some bottles are filled with a light pink liquid, while others are filled with a light blue liquid. The bottles are arranged in a grid-like fashion, with some appearing more prominent than others.

Quiz time!

Are You Ready?

There are 5 questions in this quiz.
They are all to do with measuring capacity.



Each question is multiple choice.

Question 1

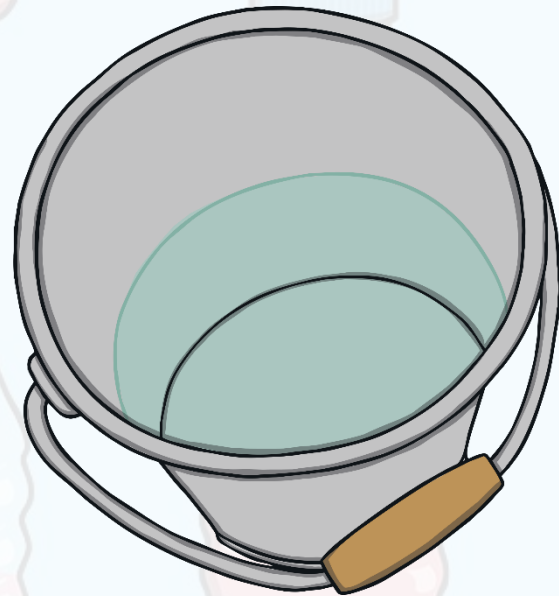
It takes 10 cups of water to fill this bucket.
How many cups will it take for the bucket to be half full?

a. 4 cups

b. 7 cups

c. 5 cups

d. 9 cups



Question 2

How full is this bottle?

a. full

b. nearly full

c. half full

d. nearly empty

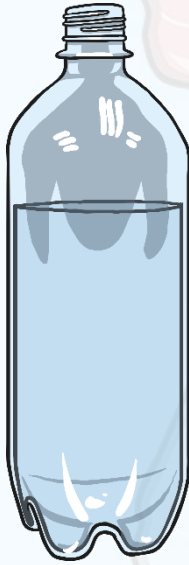


Question 3

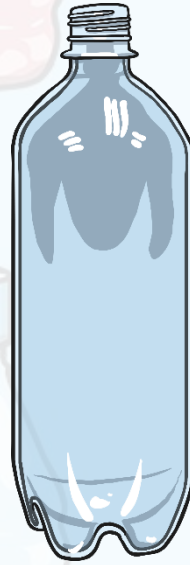
Which bottle is **nearly full**?



a



b



c



d

Question 4


This jug contains 4 litres of water when it is full.
Estimate how much water is in the jug.

a. 1 litre

b. 2 litres

c. 3 litres

d. 4 litres



Question 5


This fish tank contains 11 litres when it is half full.
How much does it contain when it is full?

a. 20 litres

b. 21 litres

c. 22 litres

d. 24 litres




The background features a repeating pattern of water bottles. Each bottle is filled with a light pink liquid. The bottles are arranged in a grid-like fashion, with some appearing more prominent than others. The overall color scheme is light blue and pink.

Answers!

Warm up

- Orange
- B, C, A
-



- One bottle is less than 3 glasses or any other number higher than 3.
- One bottle is more than one glass.

Quiz

- 1) Half of 10 is 5. So to fill half the bucket, you need 5 cups of water.
- 2) The water is half way up the bottle.
- 3) Bottle b is nearly full.
- 4) The jug is approximately half full. Half of 4 is 2.
- 5) $2 \times 11 = 22$ so the fish tank contains 22 litres when it is full.



twinkl