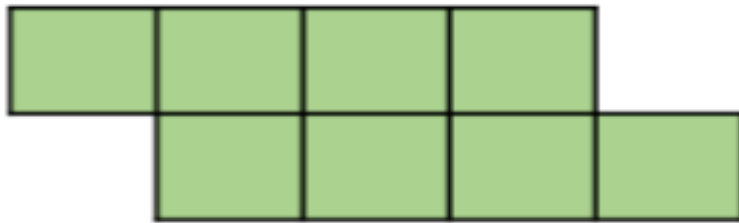


# Friday 1<sup>st</sup> May – Maths

If you have a printer you can print out the sheets or if not just write the answers in your book. Or if you have a ruler you can draw the shapes in your book as well.

1. Here is a shape made from centimetre squares.

Find the perimeter of the shape.

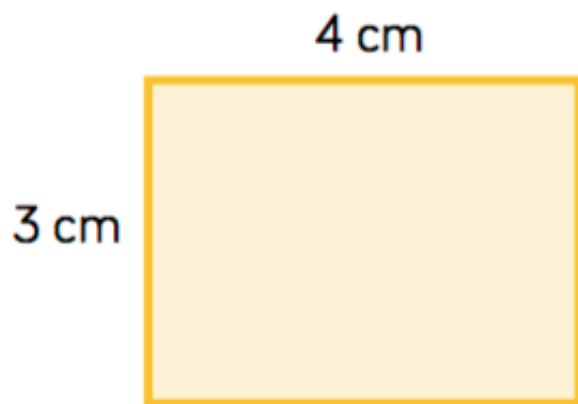


2. How many different rectangles can you draw with a perimeter of 20 cm?

3.

Amir is measuring the shape below.  
He thinks the perimeter is 7 cm.

Can you spot his mistake?



4.

Whitney is measuring the perimeter of a square.  
She says she only needs to measure one side of the square.

Do you agree?

Explain your answer.

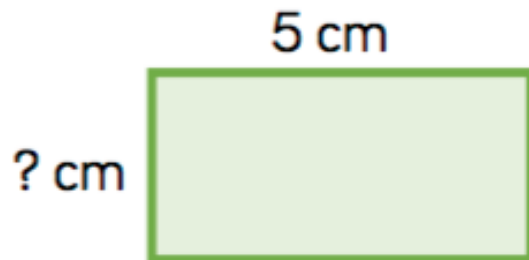
5.



Each side of this shape is of equal length.  
The perimeter is 60 cm.  
How long is each side?

---

6. What is the length of the missing side?



Perimeter = 16 cm