

Wednesday 1st April – Maths

Today we are going to try some fraction challenges.

Remember that you can always draw the shapes in your books.

1. True or False?



$\frac{1}{3}$ of the shape is shaded.

2.

Alex says,

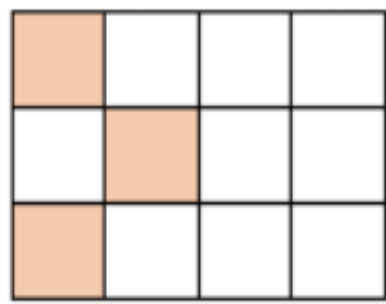
I have shaded $\frac{2}{2}$
of the shape.




What mistake might Alex have made?

3. True or False?

This shows $\frac{1}{4}$



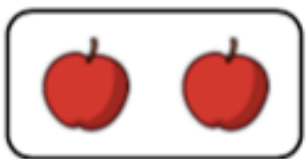
Can you shade the same shape so that it shows $\frac{1}{3}$?



4. Odd One Out



$\frac{1}{2}$



One half

Which is the odd one out?
Explain your answer.

Challenge Question

5. Annie has a piece of ribbon.



She cuts it into three equal parts.

One third of the ribbon is 6 cm long.

How long would half the ribbon be?