
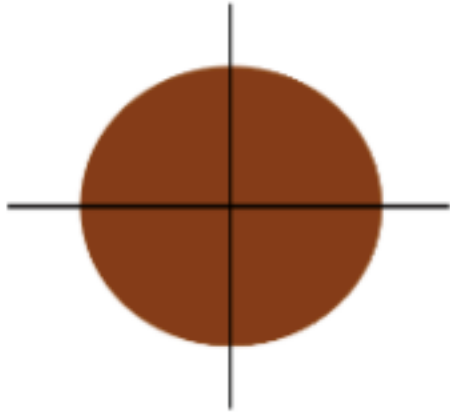


Tuesday 31st March – Maths

Remember a fraction is a part of a whole.

 Four friends are sharing a cake.




The cake is split into _____ equal parts.

Each part is worth a _____.

This can be written as $\frac{\square}{\square}$

Three friends are sharing a pizza.


The pizza is split into _____ equal parts.



Each part is worth a _____.

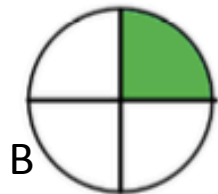
This is the same as $\frac{\square}{\square}$

Shade $\frac{1}{3}$ of each shape. Remember you can draw these in your book or print them out.



What is the same? What is different?

Which shapes represent one third? A, B, C, D, or E?



Explain why the other circles do not represent one third.